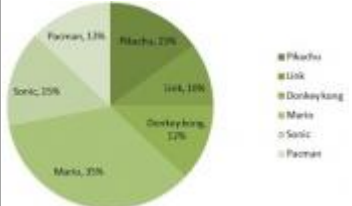
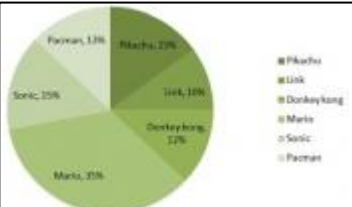


S.No	Question	Answer Options
1	 <p>Choose the correct option : The given image is that of a pie chart which depicts the choice of teenagers for the choice of favourite game character - What percent of people preferred Link and Donkey Kong?</p>	<div style="display: flex; flex-direction: column; align-items: center;"> <div style="border: 1px solid black; width: 150px; height: 30px; margin-bottom: 5px; text-align: center;">32%</div> <div style="border: 1px solid black; width: 150px; height: 30px; margin-bottom: 5px; text-align: center;">35%</div> <div style="border: 1px solid black; width: 150px; height: 30px; margin-bottom: 5px; text-align: center;">22%</div> <div style="border: 1px solid black; width: 150px; height: 30px; margin-bottom: 5px; text-align: center;">30%</div> </div> <div style="display: flex; justify-content: flex-end; margin-top: 10px;"> <input style="width: 40px; height: 20px; margin-right: 10px;" type="checkbox"/> <input style="width: 40px; height: 20px; margin-right: 10px;" type="checkbox"/> <input style="width: 40px; height: 20px; margin-right: 10px;" type="checkbox"/> <input style="width: 40px; height: 20px;" type="checkbox"/> </div>
2	 <p>Choose the correct option : The given image is that of a pie chart which depicts the choice of teenagers for the choice of favourite game character - What percent of people preferred Donkey Kong?</p>	<div style="display: flex; flex-direction: column; align-items: center;"> <div style="border: 1px solid black; width: 150px; height: 30px; margin-bottom: 5px; text-align: center;">12%</div> <div style="border: 1px solid black; width: 150px; height: 30px; margin-bottom: 5px; text-align: center;">15%</div> <div style="border: 1px solid black; width: 150px; height: 30px; margin-bottom: 5px; text-align: center;">13%</div> <div style="border: 1px solid black; width: 150px; height: 30px; margin-bottom: 5px; text-align: center;">10%</div> </div> <div style="display: flex; justify-content: flex-end; margin-top: 10px;"> <input style="width: 40px; height: 20px; margin-right: 10px;" type="checkbox"/> <input style="width: 40px; height: 20px; margin-right: 10px;" type="checkbox"/> <input style="width: 40px; height: 20px; margin-right: 10px;" type="checkbox"/> <input style="width: 40px; height: 20px;" type="checkbox"/> </div>

3

Solve the question : Which of the following scales best suits the data shown? _____

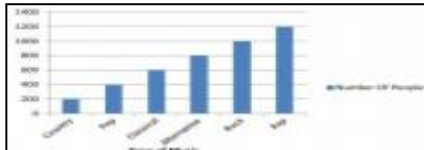
Answer

4

Solve the question : Ramiro did a survey of the number of pets owned by his classmates, with the following results: How many of his classmates had less than 3 pets?

Answer

5

A bar graph showing the number of people who like different types of music. The y-axis is labeled 'Number of People' and ranges from 0 to 2000 in increments of 200. The x-axis is labeled 'Type of Music' and lists five categories: Pop, Rock, Jazz, Hip Hop, and R&B. The bars represent the following values: Pop (500), Rock (700), Jazz (900), Hip Hop (1100), and R&B (1300).

A radio station asked it's listeners which type of music was their favourite and then recorded the answers in the bar graph below. Use ONLY the information from the bar graph and answer the following question - Which type of music did exactly 500 people like?

Pop

None of them

Correct Answer is

1. Correct Ans option is 22%
2. Correct Ans option is 12%
3. Correct Answer is 5
4. Correct Answer is 24
5. Correct Ans option is None of them