

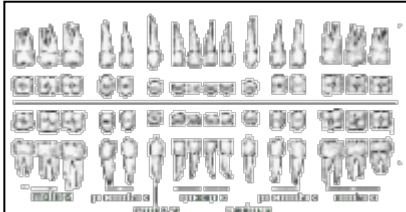


S.No	Question	Answer Options	
1	 <p>With reference to the diagram, this organ is a _____.</p>	Muscular Bag	<input type="checkbox"/>
		Plastic Bag	<input type="checkbox"/>
		Elastic Bag	<input type="checkbox"/>
		Leather Bag	<input type="checkbox"/>
2	 <p>Fill in the blanks : Bile juice breaks down _____.</p>	Carbohydrates	<input type="checkbox"/>
		Vitamins	<input type="checkbox"/>
		Fats	<input type="checkbox"/>
		Minerals	<input type="checkbox"/>

3



Identify the teeth in the image.
They are _____.

- Molars
- Canines
- Incisors
- None Of The Above

4

Fill in the blank : Saliva is secreted by _____ glands.

Answer

5

State if the following statement is TRUE or FALSE : The first set of teeth of a baby is called permanent teeth.

- True
- False

Correct Answer is

1. Correct Ans option is Muscular Bag
2. Correct Ans option is Fats
3. Correct Ans option is Molars
4. Correct Answer is salivary
5. Correct Ans option is False