




| S.No | Question | Answer Options | |
|------|---|--------------------------|--------------------------|
| 1 |  <p>How does this animal adapt itself against their enemies?</p> | By Quills | <input type="checkbox"/> |
| | By A Hard Shell | <input type="checkbox"/> | |
| | Giving Out An Awful Odour | <input type="checkbox"/> | |
| | None Of The Above | <input type="checkbox"/> | |
| 2 |  <p>Fill in the blanks based on the image: This is found along the coast of the _____ ocean.</p> | Atlantic | <input type="checkbox"/> |
| | Pacific | <input type="checkbox"/> | |
| | Indian | <input type="checkbox"/> | |
| | Antarctic | <input type="checkbox"/> | |

3



Fill in the blank based on the image: This is a _____.

- Parasite
- Scavenger
- Herbivore
- None Of The Above

4

Fill in the blank : Two animals that graze are cow and _____ .

Answer

5

State if the following statement is TRUE or FALSE : Hookworms are vertebrates.

- True
- False

Correct Answer is

1. Correct Ans option is By Quills
2. Correct Ans option is Antarctic
3. Correct Ans option is Parasite
4. Correct Answer is sheep
5. Correct Ans option is False