








S.No	Question	Answer Options	
1	 <p>What will be next in the series?</p>		<input type="checkbox"/>
			<input type="checkbox"/>
			<input type="checkbox"/>
			<input type="checkbox"/>
2	 <p>If an equal sided hexagon's perimeter is 90 cm, what is the length of each side of the hexagon?</p>	12 cm	<input type="checkbox"/>
		16 cm	<input type="checkbox"/>
		15 cm	<input type="checkbox"/>
		13 cm	<input type="checkbox"/>

3



Look at the image and select the correct option :

- Line Segment
- Point
- Line
- Triangle

4

Fill in the blanks : A cube has _____ number of edges.

Answer _____

5

State whether the sentence is true or false : The base of a pyramid is a quadrilateral.

- True
- False

Correct Answer is

1. Correct Ans Image is



2. Correct Ans option is 15 cm

3. Correct Ans option is Point

4. Correct Answer is 12

5. Correct Ans option is True