



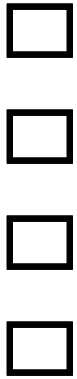
S.No	Question	Answer Options
1	 <p>If Sham fills water every alternate day, starting from the first of the month, how many days would he fill water in November, 2012?</p>	16 <input type="checkbox"/>
		17 <input type="checkbox"/>
		15 <input type="checkbox"/>
		14 <input type="checkbox"/>

2	 <p>Based on the image provided, tell how many weeks are there in the given month.</p>	5 <input type="checkbox"/>
		4 <input type="checkbox"/>
		6 <input type="checkbox"/>
		3 <input type="checkbox"/>

February 2013						
S	M	T	W	Th	F	S
					1	2
3	4	5	6	7	8	9
10	11	12	13	14	15	16
17	18	19	20	21	22	23
24	25	26	27	28		

3 Look at the calendar and answer the following : How many Thursdays are there in February?

- 3
- 4
- 5
- 6



4 Fill in the blank : Sunday comes before _____ .

Answer

5 Fill in the blank : October comes before _____ .

Answer

Correct Answer is

1. Correct Ans option is 15
2. Correct Ans option is 5
3. Correct Ans option is 4
4. Correct Answer is Monday
5. Correct Answer is November