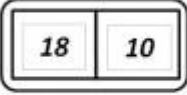



S.No	Question	Answer Options
1	 <p>Read the digital clock and select the correct time.</p>	8:10 AM <input type="checkbox"/>
		8:10 PM <input type="checkbox"/>
		6:10 AM <input type="checkbox"/>
		6:10 PM <input type="checkbox"/>

2	<p>Following is the schedule of the Ferry</p> <table border="1"> <thead> <tr> <th>Location</th> <th>Ferry 1</th> <th>Ferry 2</th> <th>Ferry 3</th> <th>Ferry 4</th> <th>Ferry 5</th> </tr> </thead> <tbody> <tr> <td>Grassy Beach</td> <td>7:00</td> <td>8:00</td> <td>8:45</td> <td>9:15</td> <td>10:15</td> </tr> <tr> <td>Harbor</td> <td>8:30</td> <td>9:30</td> <td>10:15</td> <td>10:45</td> <td>11:45</td> </tr> <tr> <td>Rosy Port</td> <td>10:30</td> <td>11:30</td> <td>12:15</td> <td>12:45</td> <td>13:45</td> </tr> <tr> <td>Rosy Shores</td> <td>11:15</td> <td>12:15</td> <td>13:00</td> <td>13:30</td> <td>14:30</td> </tr> <tr> <td>White Beach</td> <td>12:00</td> <td>14:00</td> <td>14:25</td> <td>15:15</td> <td>16:15</td> </tr> <tr> <td>Starfish City</td> <td>15:00</td> <td>16:00</td> <td>16:45</td> <td>17:15</td> <td>18:15</td> </tr> <tr> <td>Sea View</td> <td>16:00</td> <td>17:00</td> <td>17:45</td> <td>18:15</td> <td>19:15</td> </tr> </tbody> </table> <p>Look at the Time Table and answer the following question : Rita just missed the 14 : 00 ferry at White Beach. How long will she have to wait for the next ferry?</p>	Location	Ferry 1	Ferry 2	Ferry 3	Ferry 4	Ferry 5	Grassy Beach	7:00	8:00	8:45	9:15	10:15	Harbor	8:30	9:30	10:15	10:45	11:45	Rosy Port	10:30	11:30	12:15	12:45	13:45	Rosy Shores	11:15	12:15	13:00	13:30	14:30	White Beach	12:00	14:00	14:25	15:15	16:15	Starfish City	15:00	16:00	16:45	17:15	18:15	Sea View	16:00	17:00	17:45	18:15	19:15	45 mins <input type="checkbox"/>
		Location	Ferry 1	Ferry 2	Ferry 3	Ferry 4	Ferry 5																																											
		Grassy Beach	7:00	8:00	8:45	9:15	10:15																																											
		Harbor	8:30	9:30	10:15	10:45	11:45																																											
Rosy Port	10:30	11:30	12:15	12:45	13:45																																													
Rosy Shores	11:15	12:15	13:00	13:30	14:30																																													
White Beach	12:00	14:00	14:25	15:15	16:15																																													
Starfish City	15:00	16:00	16:45	17:15	18:15																																													
Sea View	16:00	17:00	17:45	18:15	19:15																																													
40 mins <input type="checkbox"/>																																																		
35 mins <input type="checkbox"/>																																																		
30 mins <input type="checkbox"/>																																																		

3



Write the time shown in the picture?

- 4:30
- 4:15
- 4:20
- 4:25


- 
- 
- 
- 

4

Fill in the blank looking at the clock  
: \_\_\_\_\_ past 8

Answer  
\_\_\_\_\_

5



Look at the calendar and state true or false : 11th November 2015 = Wednesday

- True
- False

- 
-

Correct Answer is

1. Correct Ans option is 6:10 PM
2. Correct Ans option is 45 mins
3. Correct Ans option is 4:20
4. Correct Answer is Quarter
5. Correct Ans option is True