



S.No	Question	Answer Options	
1	 <p>How many corners does the above diagram have?</p>	10	<input type="checkbox"/>
		8	<input type="checkbox"/>
		6	<input type="checkbox"/>
		12	<input type="checkbox"/>
2	 <p>The above image is of a _____.</p>	Cube	<input type="checkbox"/>
		Square	<input type="checkbox"/>
		Rectangle	<input type="checkbox"/>
		Cone	<input type="checkbox"/>

3

Choose the correct option : Which shape has the most sides?


- Square
- Triangle
- Circle
- Pentagon

4

Look at the image and answer what is A? _____

Answer

5


Write whether the shape is Plane or Solid :

- Plane
- Solid

Correct Answer is

1. Correct Ans option is 12
2. Correct Ans option is Cube
3. Correct Ans option is Pentagon
4. Correct Answer is Base
5. Correct Ans option is Plane