




S.No	Question	Answer Options	
1	 Write a fraction for the shaded part.	1/2	<input type="checkbox"/>
		1/3	<input type="checkbox"/>
		1/4	<input type="checkbox"/>
		3/4	<input type="checkbox"/>
2	 Write a fraction for the shaded part.	1/2	<input type="checkbox"/>
		1/3	<input type="checkbox"/>
		1/4	<input type="checkbox"/>
		3/4	<input type="checkbox"/>

3



Write a fraction for the shaded part.

- 1/2
- 1/3
- 1/4
- 3/4

-
-
-
-

4

Fill in the blank with : $\frac{6}{10}$
_____ $\frac{3}{10}$

Answer

5

$6\frac{5}{9} - \frac{2}{3} = 5\frac{8}{9}$
(State true or false)

- True
- False

-
-

Correct Answer is

1. Correct Ans option is 1/4
2. Correct Ans option is 1/4
3. Correct Ans option is 1/4
4. Correct Answer is >
5. Correct Ans option is True