




S.No	Question	Answer Options	
1	 <p>Fill in the blank by identifying the tree in the image : This is _____ tree.</p>	A Mango	<input type="checkbox"/>
		Acacia	<input type="checkbox"/>
		A Banyan	<input type="checkbox"/>
		A Coniferous	<input type="checkbox"/>
2	 <p>Fill in the blanks by identifying the tree in the image : It is a _____ tree.</p>	A Coconut	<input type="checkbox"/>
		Date Palm	<input type="checkbox"/>
		Acacia	<input type="checkbox"/>
		None Of The Above	<input type="checkbox"/>

3



Identify the root in the given diagram: This is a \_\_\_\_\_ root.

- Tap
- Carrot
- Fibrous
- All Of The Above

4

Fill in the blanks : Plants purify the \_\_\_\_\_ for us.

Answer  
\_\_\_\_\_

5

State true or false : Trees have weak stems.

- True
- False

Correct Answer is

1. Correct Ans option is A Coniferous
2. Correct Ans option is A Coconut
3. Correct Ans option is Fibrous
4. Correct Answer is air
5. Correct Ans option is False