





S.No	Question	Answer Options
1	In the images given, which series is incorrect ?	<div style="display: flex; flex-direction: column; align-items: center;"> <div style="border: 1px solid black; padding: 5px; margin-bottom: 5px;">  </div> <div style="border: 1px solid black; padding: 5px; margin-bottom: 5px;">  </div> <div style="border: 1px solid black; padding: 5px; margin-bottom: 5px;">  </div> <div style="border: 1px solid black; padding: 5px;">  </div> </div> <div style="display: flex; justify-content: space-around; width: 100%; margin-top: 10px;"> <input data-bbox="1242 577 1307 640" type="checkbox"/> <input data-bbox="1242 745 1307 808" type="checkbox"/> <input data-bbox="1242 913 1307 976" type="checkbox"/> <input data-bbox="1242 1081 1307 1144" type="checkbox"/> </div>

2	Complete the series : 100, 90, 80, 70, _____.	Answer _____
---	-----------------------------------------------------	-----------------

3	Complete : The sixth number in the sequence 1, 7, 13, 19 is _____.	Answer _____
---	-----------------------------------------------------------------------------	-----------------

4

Write the numbers that
come next : 10, 18, 26,
34, _____

Answer

5

Complete : The next
term in the sequence is
4, 8, 12, _____ .

Answer

Correct Answer is

1. Correct Ans Image is



2. Correct Answer is 60

3. Correct Answer is 31

4. Correct Answer is 42

5. Correct Answer is 16