




S.No	Question	Answer Options	
1	 <p>Based on the image, solve : What is the value ?</p>	0	<input type="checkbox"/>
		100	<input type="checkbox"/>
		10	<input type="checkbox"/>
		1	<input type="checkbox"/>
2	 <p>Based on the image provided, count and choose the correct number.</p>	12	<input type="checkbox"/>
		16	<input type="checkbox"/>
		18	<input type="checkbox"/>
		14	<input type="checkbox"/>

3



Based on the image provided, count and choose the correct number.

- 10
- 11
- 12
- 13

4

Fill in the blanks : A shopkeeper sold 250 clay shells on Monday, 125 clay shells on Tuesday, and 120 clay shells on Wednesday. The total clay shells he sold altogether on the three days is _____ .

Answer

5

Fill in the blanks : There are 250 monkeys in a zoo. 104 more monkeys are first brought in. Then 53 more are brought in. The total number of monkeys in the zoo is _____ .

Answer

Correct Answer is

1. Correct Ans option is 100
2. Correct Ans option is 14
3. Correct Ans option is 12
4. Correct Answer is 495
5. Correct Answer is 407