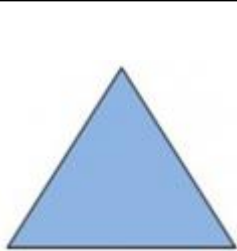
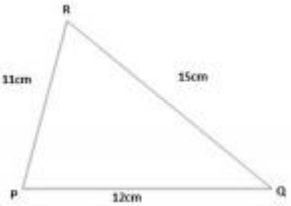


S.No	Question	Answer Options	
1	Choose the correct option : How many sides does an octagon have?	4	<input type="checkbox"/>
		8	<input type="checkbox"/>
		5	<input type="checkbox"/>
		6	<input type="checkbox"/>
2	 <p>Identify the shapes in the image provided.</p>	Rectangle	<input type="checkbox"/>
		Square	<input type="checkbox"/>
		Triangle	<input type="checkbox"/>
		Circle	<input type="checkbox"/>

3



What is the perimeter of the triangle?

30

28

37


38

4

Look at the image and answer what is A? _____

Answer

5



Based on the given image, choose the correct answer : Which of the balloons is bigger?

A

B

Correct Answer is

1. Correct Ans option is 8
2. Correct Ans option is Triangle
3. Correct Ans option is 38
4. Correct Answer is Face
5. Correct Ans option is B