




S.No	Question	Answer Options	
1	 <p>Based on the image provided, count and choose the correct number.</p>	13	<input type="checkbox"/>
		11	<input type="checkbox"/>
		10	<input type="checkbox"/>
		8	<input type="checkbox"/>
2	 <p>Based on the image provided, count and choose the correct number.</p>	4	<input type="checkbox"/>
		3	<input type="checkbox"/>
		7	<input type="checkbox"/>
		5	<input type="checkbox"/>

3



Based on the image provided, count and choose the correct number.

- 12
- 11
- 10
- 13

4

8 cats are at a pet parade. Then 7 more cats joined the parade. How many cats are in the parade now?  
\_\_\_\_\_

Answer  
\_\_\_\_\_

5

Add to find the sum :  $7 + 3 =$   
\_\_\_\_\_

Answer  
\_\_\_\_\_

Correct Answer is

1. Correct Ans option is 13
2. Correct Ans option is 7
3. Correct Ans option is 11
4. Correct Answer is 15
5. Correct Answer is 10