

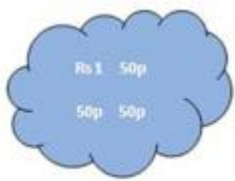


S.No	Question	Answer Options	
1	 <p>Based on the given image, Count the total money in the cloud and choose the Correct answer.</p>	₹ 4	<input type="checkbox"/>
		₹ 3.25	<input type="checkbox"/>
		₹ 3	<input type="checkbox"/>
		₹ 3.75	<input type="checkbox"/>
2	 <p>Based on the given image, Count the total money in the cloud and choose the Correct answer.</p>	₹ 2.25	<input type="checkbox"/>
		₹ 2.5	<input type="checkbox"/>
		₹ 1.75	<input type="checkbox"/>
		₹ 2	<input type="checkbox"/>

3



Based on the given image,
Count the total money in the
cloud and choose the
Correct answer.

- ₹ 2.25
- ₹ 2.5
- ₹ 1.75
- ₹ 2

4

Answer the following : ₹
90.50 + ₹ 1.50 = ₹

Answer

5

Answer the following : The
carrots cost ₹ 19. The
tomatoes cost ₹ 19. How
much less are the carrots
than the tomatoes?

- Same cost
- 1 ₹

Correct Answer is

1. Correct Ans option is ? 4
2. Correct Ans option is ? 2.25
3. Correct Ans option is ? 2.5
4. Correct Answer is 92
5. Correct Ans option is Same cost