
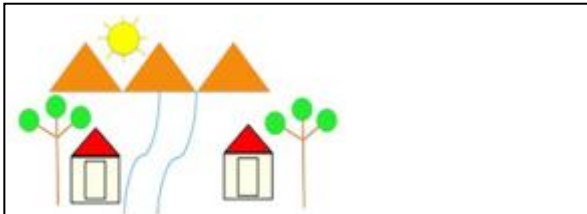


| S.No | Question | Answer Options | |
|------|---|----------------|--------------------------|
| 1 |  <p>Identify the shapes in the image provided.</p> | Rectangle | <input type="checkbox"/> |
| | | Square | <input type="checkbox"/> |
| | | Triangle | <input type="checkbox"/> |
| | | Circle | <input type="checkbox"/> |
| 2 | <p>Choose the correct option : I have 4 sides and 4 vertices, what am I?</p> | Circle | <input type="checkbox"/> |
| | | Square | <input type="checkbox"/> |
| | | Triangle | <input type="checkbox"/> |
| | | Rectangle | <input type="checkbox"/> |

3



In the image given, count the number of circles.


- 4
- 5
- 6
- 7

4

Fill in the blanks : A cube has _____ number of faces.

Answer _____

5



Based on the image provided, choose the correct option : Which object is small?

- Ball
- Balloon

Correct Answer is

1. Correct Ans option is Rectangle
2. Correct Ans option is Square
3. Correct Ans option is 7
4. Correct Answer is 6
5. Correct Ans option is Ball